

Draw the Hands of the Clock


Read the **time** under each **clock** and **draw** the **hands** on the **clock** above it.

1.




Time: **6.17 pm**

2.




Time: **4.57 am**

3.




Time: **12.45 am**

4.




Time: **8.57 pm**

5.




Time: **1.55 am**

6.




Time: **9.05 am**

7.



Time: **7.46 pm**

8.



Time: **3.30 am**